

Please check the examination details below before entering your candidate information

Candidate surname

Other names

Centre Number

Candidate Number

--	--	--	--	--

--	--	--	--

Pearson Edexcel Level 3 GCE

Time 1 hour 30 minutes

Paper
reference

8CH0/02

Chemistry

Advanced Subsidiary

PAPER 2: Core Organic and Physical Chemistry

You must have:

Scientific calculator, Data Booklet, ruler

Total Marks

Instructions

- Use **black** ink or ball-point pen.
- **Fill in the boxes** at the top of this page with your name, centre number and candidate number.
- Answer **all** questions.
- Answer the questions in the spaces provided
– *there may be more space than you need.*

Information

- The total mark for this paper is 80.
- The marks for **each** question are shown in brackets
– *use this as a guide as to how much time to spend on each question.*
- For the question marked with an **asterisk** (*), marks will be awarded for your ability to structure your answer logically, showing the points that you make are related or follow on from each other where appropriate.
- A Periodic Table is printed on the back cover of this paper.

Advice

- Read each question carefully before you start to answer it.
- Show all your working in calculations and include units where appropriate.
- Check your answers if you have time at the end.

Turn over ►

P70809RA

©2022 Pearson Education Ltd.

Q:1/1/1/1/



P 7 0 8 0 9 R A 0 1 2 8



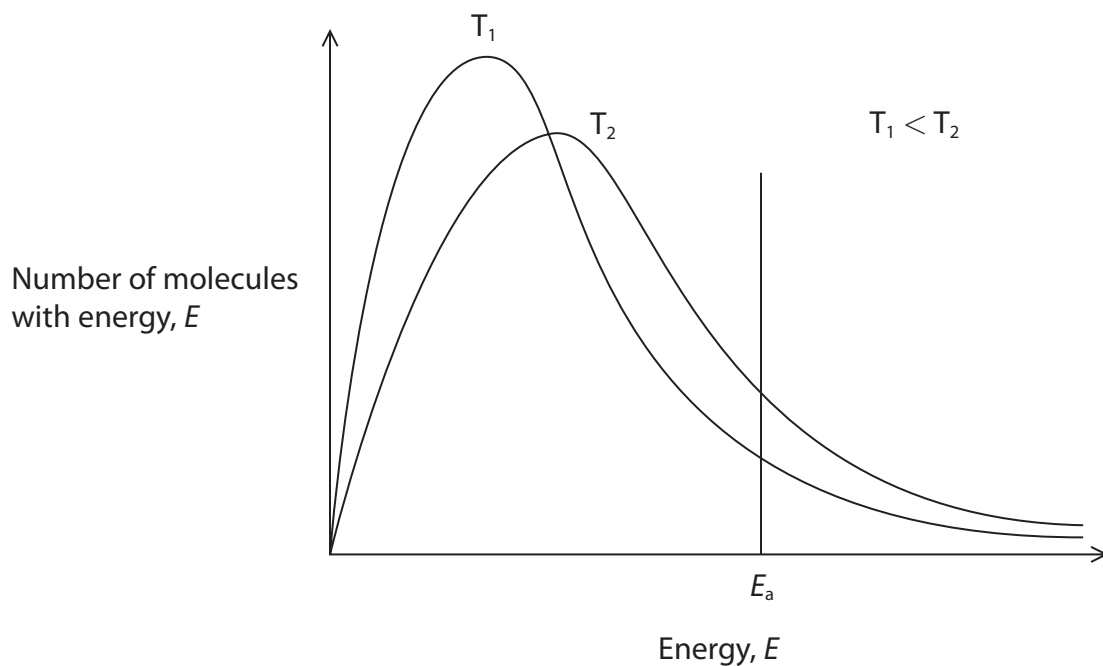
Pearson

Answer ALL questions.

Some questions must be answered with a cross . If you change your mind about an answer, put a line through the box and then mark your new answer with a cross .

1 This question is about reaction kinetics.

- (a) Maxwell-Boltzmann distributions of the molecular energies of particles in a gas are shown at two different temperatures. The activation energy for the reaction, E_a , is labelled.



- (i) The activation energy is the minimum energy required

(1)

- A** for a reaction to take place when reactant molecules collide
- B** for reactant molecules to collide
- C** for all collisions to result in a reaction
- D** for the particles to collide with the appropriate orientation



(ii) Explain, with reference to the gaseous particles, the differences in the two distributions.

(2)

.....

.....

.....

.....

.....

.....

(iii) Which of the following is **not** an explanation of why increasing the temperature increases the rate of a reaction?

(1)

- A** the area under the curve to the right of E_a is larger at a higher temperature
- B** a greater percentage of collisions are successful at a higher temperature
- C** molecules move faster and collide more often at a higher temperature
- D** there are more collisions, all of which are successful, at a higher temperature

DO NOT WRITE IN THIS AREA

DO NOT WRITE IN THIS AREA

DO NOT WRITE IN THIS AREA




P 7 0 8 0 9 R A 0 3 2 8

(b) Reaction profiles can be used to show the effect of the addition of a catalyst on the energy changes during the course of a reaction.

- (i) Draw fully labelled reaction profiles for the reaction both with and without a catalyst for an exothermic reaction.

(4)



- (ii) State how a catalyst increases the rate of a chemical reaction.

(1)

(c) A heterogeneous catalyst is often added to a reaction between gases.

A heterogeneous catalyst

(1)

- A** increases the rate without taking part in the reaction
- B** increases the yield of the reaction at equilibrium
- C** is in the same phase as the reaction mixture
- D** is often a porous material, so increasing the surface area

(Total for Question 1 = 10 marks)



2 Plastic products often have a symbol on them. Two of the symbols are shown.



The symbols are used to sort the plastic products into groups of specific types of plastic when they are thrown away.

(a) Some plastic products can be cleaned and used again.

Give two other uses of waste plastic.

(2)

.....

.....

.....

.....

.....

.....

(b) The V on the symbol with the number 3 stands for vinyl or vinyl chloride. The V is sometimes replaced by PVC, standing for polyvinyl chloride.

State the link between vinyl chloride and polyvinyl chloride.

(1)

.....

.....

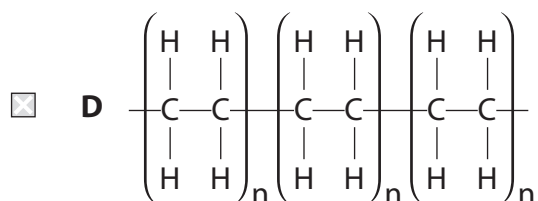
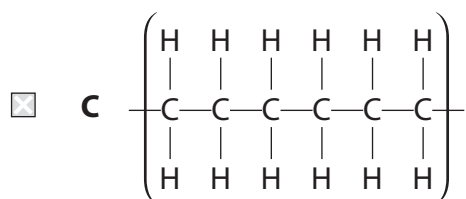
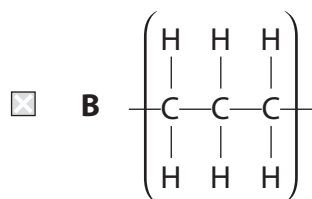
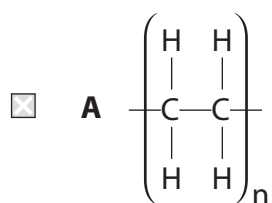
.....



(c) LDPE stands for low density poly(ethene).

Which of the diagrams shows exactly three repeat units of poly(ethene)?

(1)

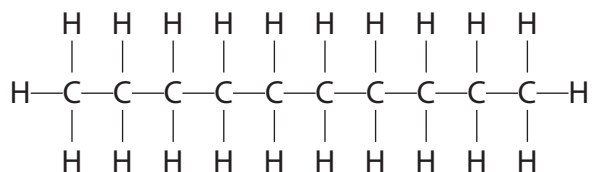


(Total for Question 2 = 4 marks)

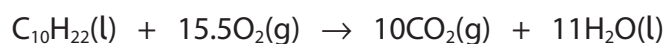


3 Decane, $C_{10}H_{22}$, is an alkane present in petrol and kerosene.

It has the displayed formula



The enthalpy change of combustion, $\Delta_c H^\ominus$, of decane can be estimated using mean bond enthalpy values and the equation shown.



(a) (i) Calculate the enthalpy change of combustion of decane, using the mean bond enthalpy values in the table.

(3)

Bond	Mean bond enthalpy / kJ mol^{-1}
C—C	347
C—H	413
O=O	498
C=O	805
O—H	464



(ii) A data book value for the enthalpy change of combustion of decane is $-6778 \text{ kJ mol}^{-1}$.

Give two reasons for the difference between your answer to (a)(i) and this value.

(2)

.....

.....

.....

.....

.....

(b) Catalytic converters in cars remove unwanted substances such as nitrogen monoxide, carbon monoxide and unreacted hydrocarbons from the exhaust fumes.

The formula of the nitrogen monoxide free radical can be written as $\text{NO}\cdot$

(i) Which is true for the $\text{NO}\cdot$ free radical?

(1)

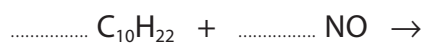
- A** $\text{NO}\cdot$ is formed during thermal decomposition of LiNO_3
- B** $\text{NO}\cdot$ has a total of 15 protons, 15 neutrons and 16 electrons
- C** $\text{NO}\cdot$ is a species with an unpaired electron
- D** $\text{NO}\cdot$ is formed by heterolytic fission

(ii) It has been suggested that unreacted hydrocarbons and nitrogen monoxide are removed in a catalytic converter by reacting them together.

The reaction between decane and nitrogen monoxide produces carbon dioxide, water and nitrogen as the only products.

Complete the balanced equation for this reaction.
State symbols are not required.

(2)



(iii) Give a possible reason why this reaction might not proceed according to the equation in (b)(ii).

(1)

.....

.....

.....

(Total for Question 3 = 9 marks)

DO NOT WRITE IN THIS AREA

DO NOT WRITE IN THIS AREA

DO NOT WRITE IN THIS AREA



P 7 0 8 0 9 R A 0 9 2 8

- 4 A thermometric titration is a method for finding the end-point of a titration between aqueous solutions of ammonia and ethanoic acid.

A thermometric titration was carried out using the following steps:

- the temperatures of the aqueous ammonia and ethanoic acid solutions were measured and found to be 20.1 °C
- 30 cm³ of the aqueous ammonia was placed in a polystyrene cup
- a 10 cm³ portion of an ethanoic acid solution, concentration 1.10 mol dm⁻³, was added to the polystyrene cup, the mixture stirred and the temperature measured
- further 10 cm³ portions of ethanoic acid solution were added, the mixture stirred, and the temperature measured immediately after each addition, until a total of 80 cm³ had been added.

(a) Results for this experiment are shown in the table.

Volume of ethanoic acid added / cm ³	0	10	20	30	40	50	60	70	80
Temperature / °C	20.1	21.8	23.5	25.1	26.4	25.8	24.9	24.1	23.3

- (i) Plot the results using the axes provided.
Include two straight lines of best fit, extrapolated until they meet.

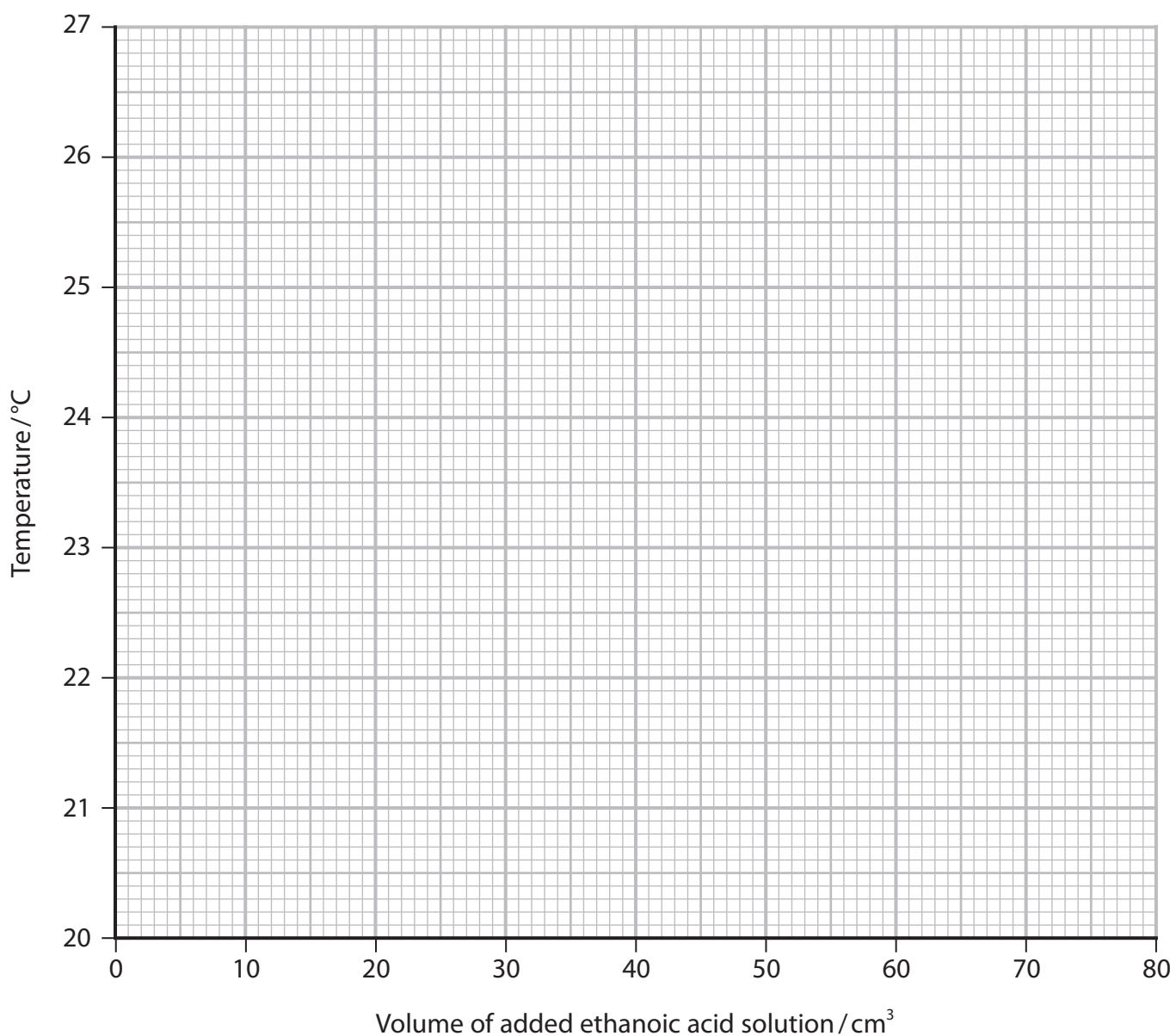
(2)



DO NOT WRITE IN THIS AREA

DO NOT WRITE IN THIS AREA

DO NOT WRITE IN THIS AREA

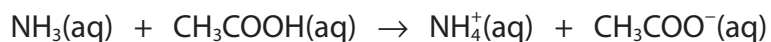


(ii) Determine the maximum temperature rise from your graph. (1)

(iii) Calculate the number of moles of ethanoic acid, with a concentration of 1.10 mol dm⁻³, added at the end-point of the reaction. (2)



(iv) The reaction that occurs is



Calculate the enthalpy change per mole for this reaction.
Include a sign and units in your answer.

[Assume:

specific heat capacity of the solution at the end-point = $4.18 \text{ J g}^{-1} \text{ }^\circ\text{C}^{-1}$
1.00 cm³ of the solution at the end-point has a mass of 1.00 g]

(3)

DO NOT WRITE IN THIS AREA

DO NOT WRITE IN THIS AREA

DO NOT WRITE IN THIS AREA

(b) (i) The temperature of the reaction mixture initially increased because the reaction is

(1)

- A** endothermic so energy is absorbed by the water
- B** endothermic so energy is released by the water
- C** exothermic so energy is absorbed by the water
- D** exothermic so energy is released by the water

(ii) Give the main reason why, after the end-point was reached, the temperature of the solution decreased.

(1)

.....

.....

.....

(Total for Question 4 = 10 marks)



5 Chloroalkanes can be formed from both alkenes and alkanes.

(a) Ethene can be converted into chloroethane.

(i) Identify, by name or formula, the reagent for this conversion.

(1)

(ii) Draw the mechanism for the conversion of ethene into chloroethane.

Include curly arrows, and any relevant lone pairs and dipoles.

(4)



(b) Ethane can also be converted into chloroethane.

- (i) Give the reagent and condition required to convert ethane into chloroethane. (1)

Reagent

Condition

- (ii) What is the mechanism and type of reaction by which ethane is converted into chloroethane? (1)

- A** electrophilic addition
 B free radical addition
 C free radical substitution
 D nucleophilic substitution

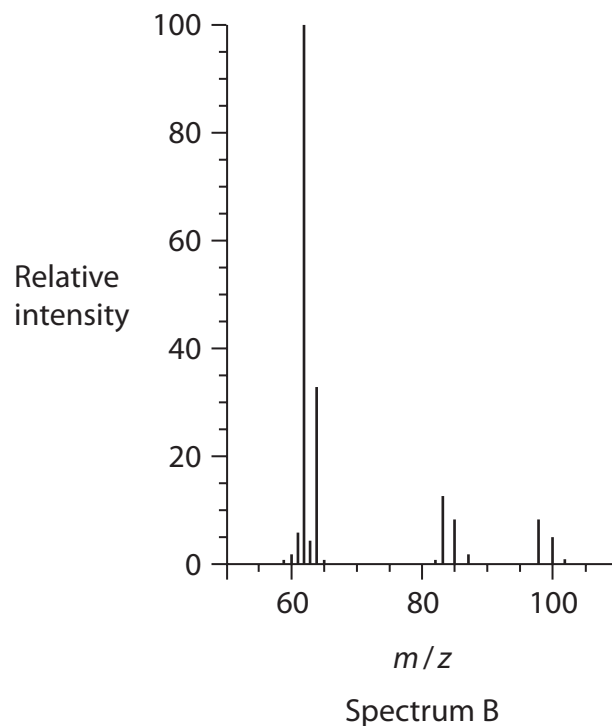
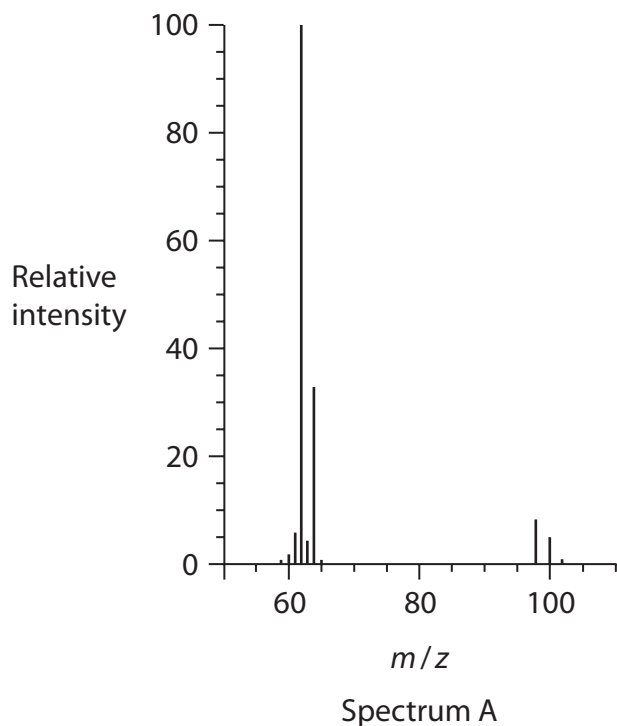
- (iii) Further reactions of chloroethane result in the formation of small amounts of the isomers 1,1-dichloroethane and 1,2-dichloroethane.

Write equations to show the formation of these products.
Curly arrows are not required.

(3)



(iv) The mass spectra of the two isomers of dichloroethane are shown.



Deduce the molecular formulae of the species responsible for the molecular ion peaks at m/z 98, 100 and 102. The molecular formulae for the species producing these peaks are the same in both spectra.

(2)



(v) State why in both spectra the peaks at 98, 100 and 102 have different relative intensities.

(1)

.....

.....

.....

(vi) Explain how the presence of the peaks at 83, 85 and 87 in Spectrum B allows the identification of the isomer responsible for this spectrum.

(2)

.....

.....

.....

.....

.....

.....

.....

.....

.....

.....

(Total for Question 5 = 15 marks)

DO NOT WRITE IN THIS AREA

DO NOT WRITE IN THIS AREA

DO NOT WRITE IN THIS AREA



DO NOT WRITE IN THIS AREA

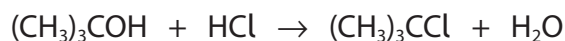
DO NOT WRITE IN THIS AREA

DO NOT WRITE IN THIS AREA

BLANK PAGE



- 6 The preparation of 2-chloro-2-methylpropane, $(\text{CH}_3)_3\text{CCl}$, involves the reaction of concentrated hydrochloric acid with 2-methylpropan-2-ol, $(\text{CH}_3)_3\text{COH}$, a tertiary alcohol.



- (a) Primary alcohols react very slowly with concentrated hydrochloric acid. State a different reagent for the chlorination of primary alcohols.

(1)

- (b) In an experiment, 12.0 g of 2-methylpropan-2-ol was shaken with excess concentrated hydrochloric acid in a separating funnel.

After about 15 minutes, the product formed as a separate layer.

Data:

Substance	Boiling temperature /°C	Density /g cm ⁻³
2-methylpropan-2-ol	82	0.79
2-chloro-2-methylpropane	51	0.84
water	100	1.00

Draw a diagram of the separating funnel after 15 minutes, labelling the layer containing 2-chloro-2-methylpropane.

(2)

DO NOT WRITE IN THIS AREA

DO NOT WRITE IN THIS AREA

DO NOT WRITE IN THIS AREA



(c) After separation, the organic layer was shaken with sodium hydrogencarbonate solution. Fizzing was observed.

(i) Identify, by name or formula, the gas that was given off. (1)

(ii) Give the **formula** of the ion that reacted with the hydrogencarbonate ion to form the gas. (1)

(iii) Describe how to dry the organic layer to prepare it for distillation. Include the name of a suitable drying agent. (2)

(d) The dried 2-chloro-2-methylpropane was transferred to the distillation apparatus.

(i) State the appropriate temperature range over which to collect the product. (1)

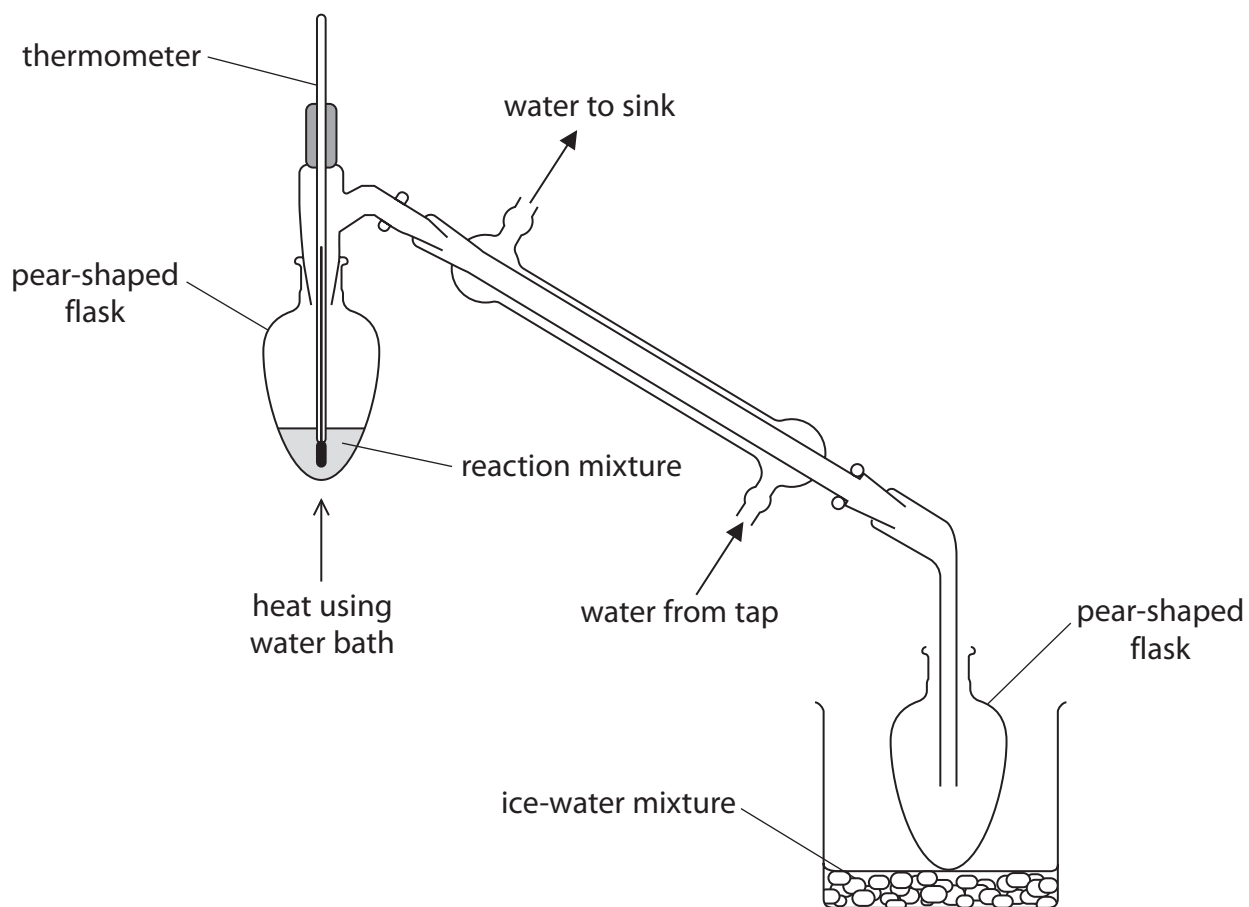
DO NOT WRITE IN THIS AREA

DO NOT WRITE IN THIS AREA

DO NOT WRITE IN THIS AREA



*(ii) A diagram of the distillation apparatus is shown.



Discuss the improvements that should be made to the set-up of the apparatus. Include the likely effect of the errors identified on the yield or purity of the product.

Assume the apparatus is suitably clamped.

(6)

.....

.....

.....

.....

.....

.....

.....

.....

.....

.....

.....

DO NOT WRITE IN THIS AREA

DO NOT WRITE IN THIS AREA

DO NOT WRITE IN THIS AREA



DO NOT WRITE IN THIS AREA

DO NOT WRITE IN THIS AREA

DO NOT WRITE IN THIS AREA

Handwriting practice area with 20 sets of horizontal lines. Each set consists of a solid top line, a dashed middle line, and a solid bottom line.



- (e) 11.6 cm^3 of 2-chloro-2-methylpropane was collected from 12.0 g of 2-methylpropan-2-ol.

Calculate the percentage yield using the data in the table.

(4)

Substance	Density $/\text{g cm}^{-3}$	Molar mass $/\text{g mol}^{-1}$
2-methylpropan-2-ol	0.79	74
2-chloro-2-methylpropane	0.84	92.5



(f) Infrared spectroscopy can be used to determine the purity of a substance.

(i) State how infrared spectroscopy could be used to show that no 2-methylpropan-2-ol was present in the distillate.

(1)

.....

.....

.....

(ii) Give one advantage and one disadvantage of using a chemical test rather than infrared spectroscopy to determine whether any of the 2-methylpropan-2-ol remained.

(2)

.....

.....

.....

.....

.....

.....

(Total for Question 6 = 21 marks)

DO NOT WRITE IN THIS AREA

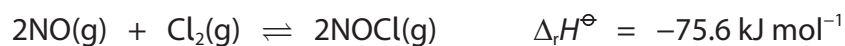
DO NOT WRITE IN THIS AREA

DO NOT WRITE IN THIS AREA



- 7 Nitrogen monoxide and chlorine gases react together to form a single product, nitrosyl chloride, NOCl.

Below 100 °C the yield of NOCl is almost 100 %, but as the temperature rises the yield of NOCl decreases as the equilibrium position shifts to the left.



- (a) A 1 dm³ reaction vessel, initially containing 2 mol of NO and 1 mol of Cl₂, was allowed to come to equilibrium at 225 °C to produce 1.82 mol of NOCl.

- (i) Calculate the number of moles of NO and Cl₂ at equilibrium.

(2)

Moles of NO

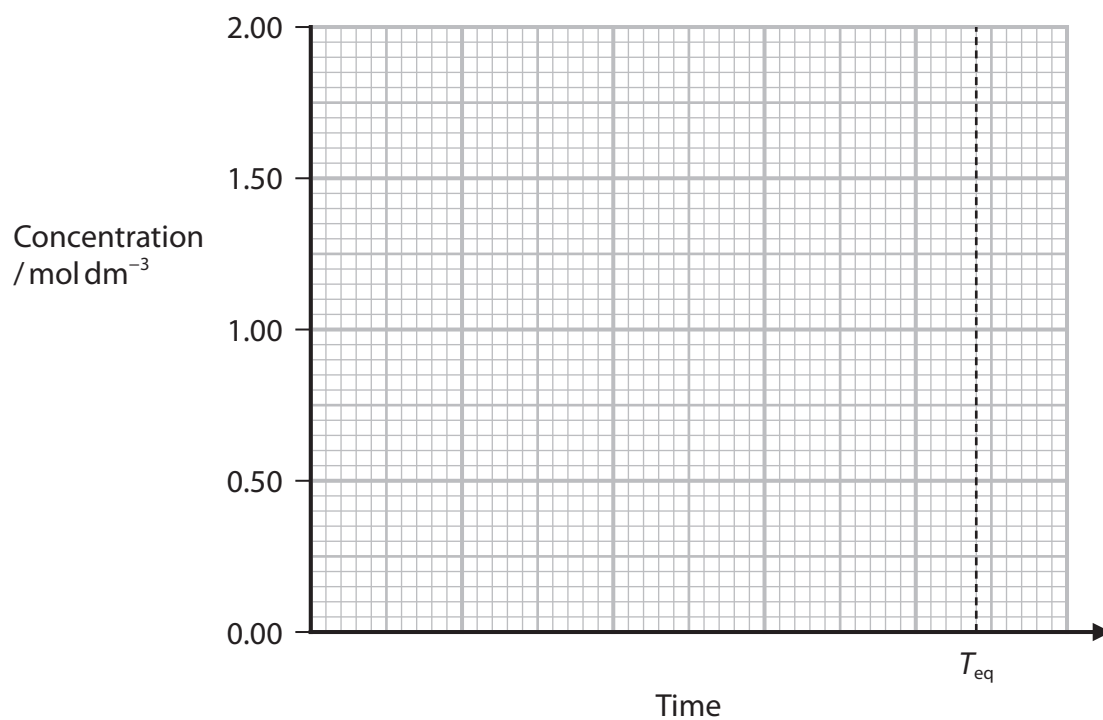
Moles of Cl₂



(ii) Sketch three lines showing the change in concentration over time of the three components of the reaction using the axes given.

You should assume that the reaction reaches equilibrium at time T_{eq} .

(3)



DO NOT WRITE IN THIS AREA

DO NOT WRITE IN THIS AREA

DO NOT WRITE IN THIS AREA



P 7 0 8 0 9 R A 0 2 5 2 8

(iii) The expression for the equilibrium constant, K_c , for this reaction is

(1)

A $K_c = \frac{2[\text{NOCl}]}{2[\text{NO}][\text{Cl}_2]}$

B $K_c = \frac{[\text{NOCl}]^2}{[\text{NO}]^2[\text{Cl}_2]}$

C $K_c = \frac{2[\text{NO}][\text{Cl}_2]}{2[\text{NOCl}]}$

D $K_c = \frac{[\text{NO}]^2[\text{Cl}_2]}{[\text{NOCl}]^2}$

(iv) Give the reason why the equilibrium yield of NOCl decreases when the temperature changes from 25 °C to 225 °C.

The enthalpy change for the reaction at 25 °C is $-75.6 \text{ kJ mol}^{-1}$.

(1)

.....

.....

.....

DO NOT WRITE IN THIS AREA


DO NOT WRITE IN THIS AREA

DO NOT WRITE IN THIS AREA

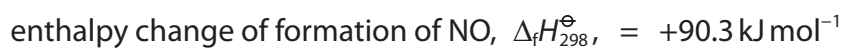
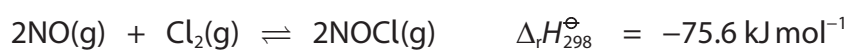


- (b) (i) Complete the Hess cycle to enable you to calculate the enthalpy change of formation, $\Delta_f H_{298}^\ominus$, of NOCl.
Include state symbols.

(2)



- (ii) Calculate the enthalpy change of formation, $\Delta_f H_{298}^\ominus$, of NOCl given the data



(2)

(Total for Question 7 = 11 marks)

TOTAL FOR PAPER = 80 MARKS



The Periodic Table of Elements

1 2 3 4 5 6 7 0 (8) (18)

1.0	H
	hydrogen
	1

Key

relative atomic mass
atomic symbol
name
atomic (proton) number

(1)	(2)	(3)	(4)	(5)	(6)	(7)	(8)	(9)	(10)	(11)	(12)	(13)	(14)	(15)	(16)	(17)	(18)
6.9	9.0	45.0	47.9	50.9	52.0	54.9	55.8	58.9	58.7	63.5	65.4	10.8	12.0	14.0	16.0	19.0	4.0
Li	Be	Sc	Ti	V	Cr	Mn	Fe	Co	Ni	Cu	Zn	B	C	N	O	F	He
lithium	beryllium	scandium	titanium	vanadium	chromium	manganese	iron	cobalt	nickel	copper	zinc	boron	carbon	nitrogen	oxygen	fluorine	helium
3	4	21	22	23	24	25	26	27	28	29	30	5	6	7	8	9	2
23.0	24.3	88.9	91.2	92.9	95.9	[98]	101.1	102.9	106.4	107.9	112.4	27.0	28.1	31.0	32.1	35.5	39.9
Na	Mg	Y	Zr	Nb	Mo	Tc	Ru	Rh	Pd	Ag	Cd	Al	Si	P	S	Cl	Ar
sodium	magnesium	yttrium	zirconium	niobium	molybdenum	technetium	ruthenium	rhodium	palladium	silver	cadmium	aluminium	silicon	phosphorus	sulfur	chlorine	argon
11	12	39	40	41	42	43	44	45	46	47	48	13	14	15	16	17	18
39.1	40.1	88.9	91.2	92.9	95.9	[98]	101.1	102.9	106.4	107.9	112.4	27.0	28.1	31.0	32.1	35.5	39.9
K	Ca	La*	Hf	Ta	W	Re	Os	Ir	Pt	Au	Hg	Ga	Ge	As	Se	Br	Kr
potassium	calcium	lanthanum	hafnium	tantalum	tungsten	rhenium	osmium	iridium	platinum	gold	mercury	gallium	germanium	arsenic	selenium	bromine	krypton
19	20	57	72	73	74	75	76	77	78	79	80	31	32	33	34	35	36
85.5	87.6	138.9	178.5	180.9	183.8	186.2	190.2	192.2	195.1	197.0	200.6	69.7	72.6	74.9	79.0	79.9	83.8
Rb	Sr	Ba	Hf	Ta	W	Re	Os	Ir	Pt	Au	Hg	In	Sn	Sb	Te	I	Xe
rubidium	strontium	barium	hafnium	tantalum	tungsten	rhenium	osmium	iridium	platinum	gold	mercury	indium	tin	antimony	tellurium	iodine	xenon
37	38	56	72	73	74	75	76	77	78	79	80	49	50	51	52	53	54
132.9	137.3	138.9	178.5	180.9	183.8	186.2	190.2	192.2	195.1	197.0	200.6	114.8	118.7	121.8	127.6	126.9	131.3
Cs	Ba	La*	Hf	Ta	W	Re	Os	Ir	Pt	Au	Hg	Pb	Bi	Po	At	Rn	Rn
caesium	barium	lanthanum	hafnium	tantalum	tungsten	rhenium	osmium	iridium	platinum	gold	mercury	lead	bismuth	polonium	astatine	radon	radon
55	56	57	72	73	74	75	76	77	78	79	80	82	83	84	85	86	86
[223]	[226]	[227]	[261]	[262]	[266]	[264]	[277]	[268]	[271]	[272]	[272]	204.4	207.2	209.0	[210]	[222]	[222]
Fr	Ra	Ac*	Rf	Db	Sg	Bh	Hs	Mt	Ds	Rg	Rg	Tl	Pb	Bi	Po	At	Rn
francium	radium	actinium	rutherfordium	dubnium	seaborgium	bohrium	hassium	meitnerium	darmstadtium	roentgenium	roentgenium	thallium	lead	bismuth	polonium	astatine	radon
87	88	89	104	105	106	107	108	109	110	111	111	81	82	83	84	85	86

Elements with atomic numbers 112-116 have been reported but not fully authenticated

140	141	144	150	152	157	163	165	167	173	175
Ce	Pr	Nd	Sm	Eu	Gd	Dy	Ho	Er	Yb	Lu
cerium	praseodymium	neodymium	samarium	europium	gadolinium	dysprosium	holmium	erbium	ytterbium	lutetium
58	59	60	62	63	64	66	67	68	70	71
232	231	238	242	243	247	251	254	253	254	257
Th	Pa	U	Pu	Am	Cm	Cf	Es	Fm	No	Lr
thorium	protactinium	uranium	plutonium	americium	curium	californium	einsteinium	fermium	nobelium	lawrencium
90	91	92	94	95	96	98	99	100	102	103

* Lanthanide series

* Actinide series

DO NOT WRITE IN THIS AREA

DO NOT WRITE IN THIS AREA

DO NOT WRITE IN THIS AREA

